

Review of the Tangent Ratio Assignment

© 2012 Kuta Software LLC. All rights reserved.

Find each angle measure to the nearest degree.

1) $\tan Y = 1.6003$

2) $\tan Y = 2.0503$

3) $\tan A = 5.6713$

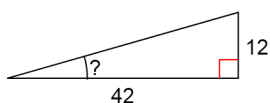
4) $\tan A = 0.6745$

5) $\tan B = 1.6643$

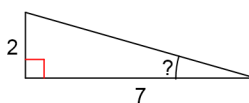
6) $\tan W = 1.3764$

Find the measure of the indicated angle to the nearest degree.

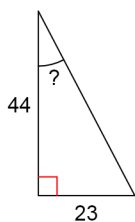
7)



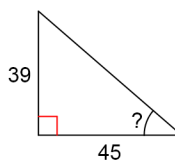
8)



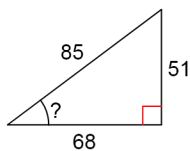
9)



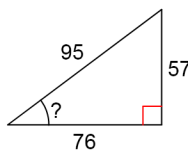
10)



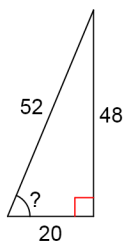
11)



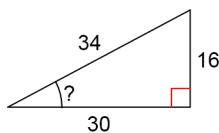
12)



13)



14)



Answers to Review of the Tangent Ratio Assignment (ID: 1)

- 1) 58°
- 5) 59°
- 9) 28°
- 13) 67°

- 2) 64°
- 6) 54°
- 10) 41°
- 14) 28°

- 3) 80°
- 7) 16°
- 11) 37°

- 4) 34°
- 8) 16°
- 12) 37°