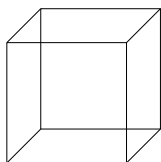


Visualizing Unseen Surfaces

Determine the number of surfaces of each of the following 3 dimensional objects.

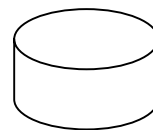
58. Determine the number of surfaces.




59. Determine the number of surfaces.



60. Determine the number of surfaces.




61. Determine the number of surfaces.



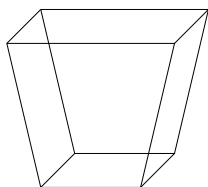
62. Determine the number of surfaces.




63. Determine the number of surfaces.



64. Determine the number of surfaces.



65. Determine the number of surfaces.



66. Determine the number of surfaces.




67. Determine the number of surfaces.



68. Determine the number of surfaces.




69. Determine the number of surfaces.



70. Determine the number of surfaces.



71. Determine the number of surfaces.



72. Determine the number of surfaces.

